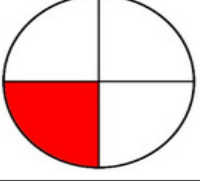



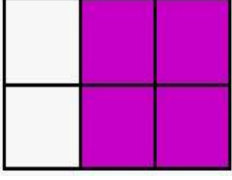
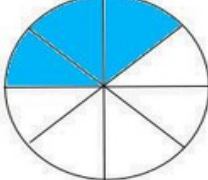
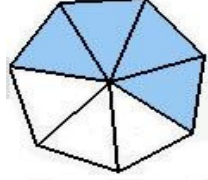
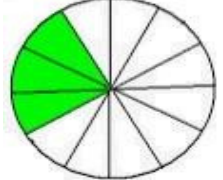
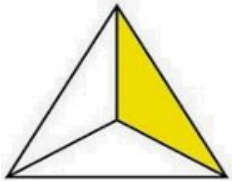

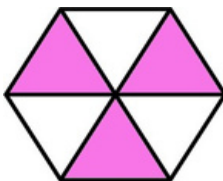
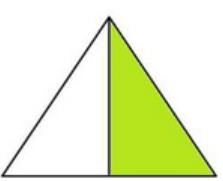

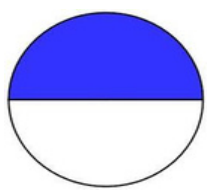
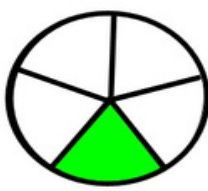
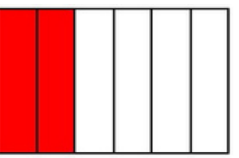
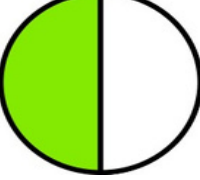
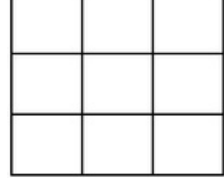
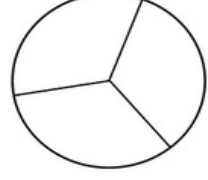
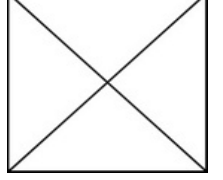
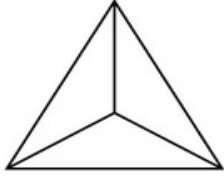
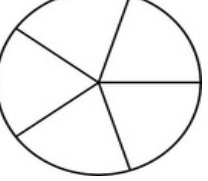
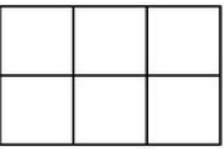
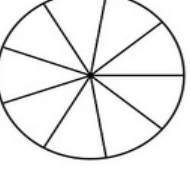
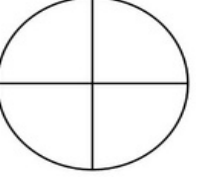

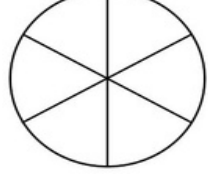
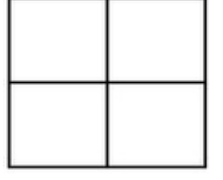
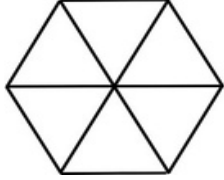
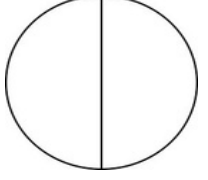
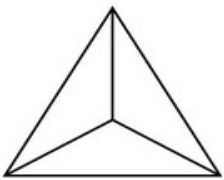
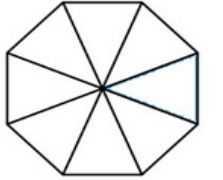


## PAYI PAYDASINDAN KÜÇÜK OLAN KESİRLER

1. Şekillerin boyalı kısımlarına karşılık gelen kesirleri örnekteki gibi yazalım.

 $\frac{1}{4}$	 $\frac{4}{8}$	 $\frac{2}{8}$	 $\frac{3}{5}$
 $\frac{4}{6}$	 $\frac{3}{8}$	 $\frac{3}{6}$	 $\frac{3}{10}$
 $\frac{1}{3}$	 $\frac{3}{6}$	 $\frac{3}{6}$	 $\frac{1}{2}$
 $\frac{2}{3}$	 $\frac{1}{2}$	 $\frac{1}{5}$	 $\frac{3}{8}$

2. Aşağıdaki şekillerin belirtilen kadarını boyyalım.

 $\frac{1}{2}$	 $\frac{3}{9}$	 $\frac{2}{3}$	 $\frac{3}{4}$
 $\frac{1}{3}$	 $\frac{1}{5}$	 $\frac{4}{6}$	 $\frac{2}{9}$
 $\frac{2}{4}$	 $\frac{2}{10}$	 $\frac{5}{6}$	 $\frac{1}{4}$
 $\frac{2}{6}$	 $\frac{1}{2}$	 $\frac{2}{3}$	 $\frac{3}{8}$